

Summer Assignment for incoming 8th-Grade Students – Greenwood Lakes Middle School

Name: _____

Command of the topics in this assignment are important to be successful in Pre-Algebra. These problems should all be completed correctly (not attempted), and all work must be shown. It is your responsibility to know and understand these topics before the start of the school year. There is **NO CALCULATOR** to be used on this assignment. This assignment will be due the week of August 10th; a specific date will be given by your teacher.

ALL work MUST be shown.

Simplify.

1) $4w + 5n - 8 + 2w - 4n + 9$

2) $5(3r - 4) + 6r + 28$

3) $3m^2 + 5m - m^2 + m + 3$

Solve the equation.

4) $14 = d - 6$

5) $5 + c = 10$

6) $5m = 11$

7) $\frac{f}{6} = 2$

8) $-8 = 5z + 16$

9) $\frac{f}{6} - 2 = -14$

10) $-2r + 5 = 13$

11) $-4m + 10 \leq 2$

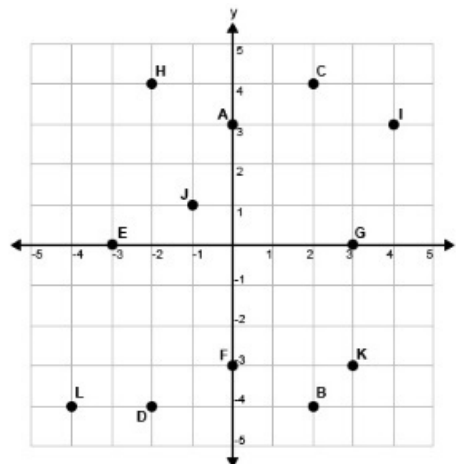
12) Find the coordinates of the following points.

A) _____ B) _____ C) _____

D) _____ E) _____ F) _____

G) _____ H) _____ I) _____

J) _____ K) _____ L) _____



Convert each fraction to a decimal.

Example: Convert $\frac{1}{4}$ into a decimal through division.

$$\begin{array}{r}
 0.25 \\
 4 \overline{) 1.00} \\
 \underline{- 8} \\
 20 \\
 \underline{- 20} \\
 0
 \end{array}$$

denominator
numerator

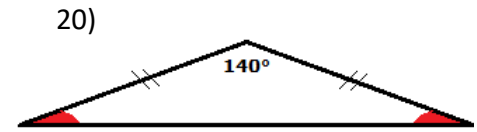
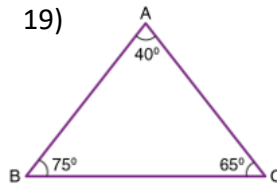
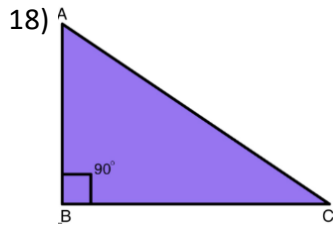
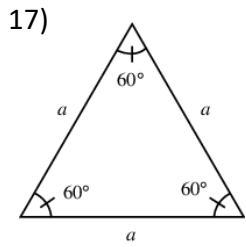
13) $\frac{1}{5} =$

14) $\frac{3}{8} =$

15) $\frac{10}{12} =$

16) $\frac{7}{10} =$

Classify each triangle below by its angle measures (acute, right, obtuse) and by its side lengths (scalene, equilateral, isosceles).



Solve.

21) $-6 + 4 =$ _____ 22) $-2 + 7 =$ _____ 23) $-9 - (-4) =$ _____ 24) $14 - 26 =$ _____

25) $-4(-5) =$ _____ 26) $\frac{8(-4)(-3)}{-6} =$ _____ 27) $-\frac{5}{6}\left(-\frac{18}{30}\right) =$ _____

28) A family of 4 paid \$72.48 to attend a movie. Given that each ticket costs the same amount, how much did it cost per person?

29) It took Malia $1\frac{1}{2}$ hours to run $6\frac{3}{4}$ miles. How many miles does she run per hour?

Evaluate the expression when $a = 3$, $b = -2$, $c = 4$.

30) $bc - a$

31) $\frac{c}{-2} - a^2$

32) $-a^4$

33) $5c - b + a$

Expand and evaluate the following. Example: $2^3 = 2 \times 2 \times 2 = 8$

34) 6^2

35) 5^3

36) $\left(\frac{2}{5}\right)^3$

37) $\left(\frac{7}{9}\right)^4$

Write an expression.

38) 6 less than the sum of 4 and n .

39) 8 more than the quotient of c and 3.